
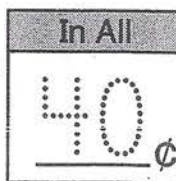


Name \_\_\_\_\_

P 9-3

# Counting Dimes and Nickels

Count on. Then write how much money in all.

1.  





10¢ 20¢ 25¢ 30¢ 35¢ 40¢




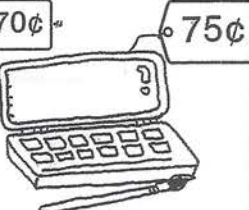
2.  

\_\_\_\_¢ \_\_\_\_¢ \_\_\_\_¢ \_\_\_\_¢ \_\_\_\_¢ \_\_\_\_¢ \_\_\_\_¢

Write how much money in all.

Then circle the toy that you can buy.

3.    

4.    

## Problem Solving Number Sense

Solve the riddles.

5. Hayes has 5 coins. She has 2 dimes. The rest are nickels. How much money does Hayes have?

\_\_\_\_¢

6. Jake has 5 coins. He has 2 nickels. The rest are dimes. How much money does Jake have?

\_\_\_\_¢

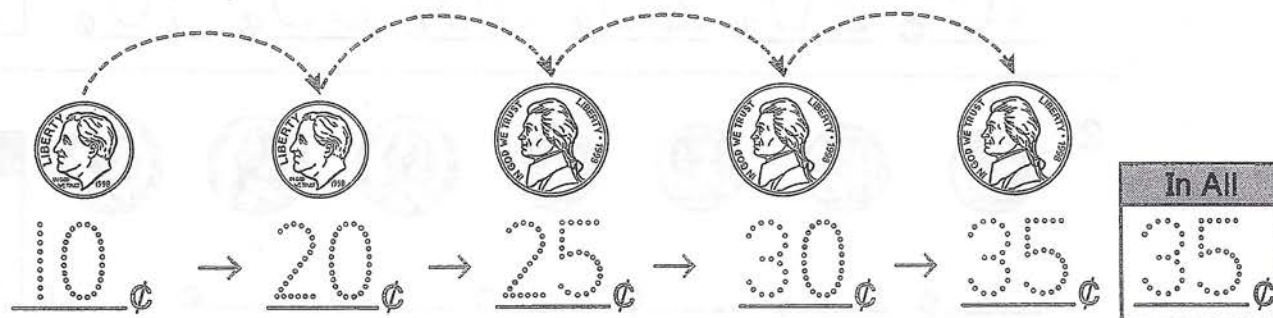
# Counting Dimes and Nickels

Count dimes by 10s.

Count nickels by 5s.

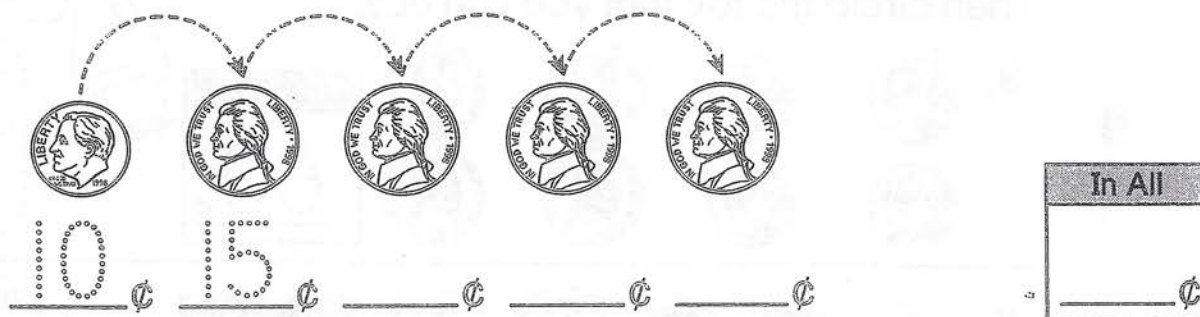
Count the dimes first.

Then count the nickels.



Count on. Then write how much money in all.

1.



2.

