



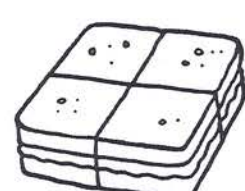



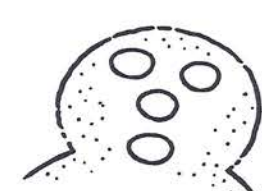
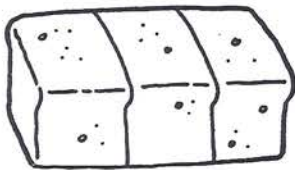


Fairy Tale Fractions

FRACTIONS

Shade the fraction shown in each problem.

<p>1</p>  <p>Goldilocks ate $\frac{1}{3}$ of Papa Bear's porridge.</p>	<p>2</p>  <p>She ate $\frac{2}{3}$ of Mama Bear's porridge.</p>	<p>3</p>  <p>She ate Baby Bear's whole bowl.</p>
<p>4</p> <p>Little Red Riding Hood ate $\frac{1}{4}$ of the sandwich in her basket.</p> 	<p>5</p> <p>Her grandma ate $\frac{3}{4}$ of the sandwich.</p> 	
<p>6</p> <p>Gretel ate $\frac{1}{2}$ of the candy before the witch came.</p> 	<p>7</p> <p>Hansel ate $\frac{1}{2}$ of the candy before the witch came.</p> 	
<p>8</p> <p>$\frac{3}{4}$ of the candy on the Gingerbread Man's tummy is green.</p> 	<p>9</p> <p>$\frac{1}{4}$ of the candy on his face is red.</p> 	
<p>10</p> <p>Hen's chicks ate $\frac{2}{3}$ of the bread she baked.</p> 	<p>11</p> <p>Hen ate $\frac{1}{3}$ of the bread she baked.</p> 