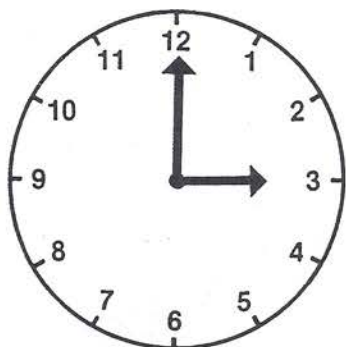


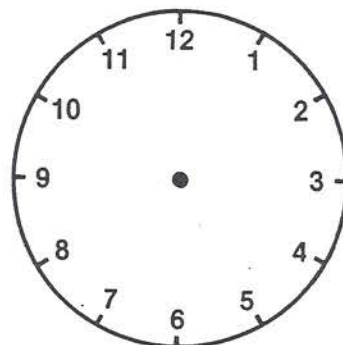
Name _____

Draw the hands on each clock.
Write the time on the lines.



Now the time is

3:00.

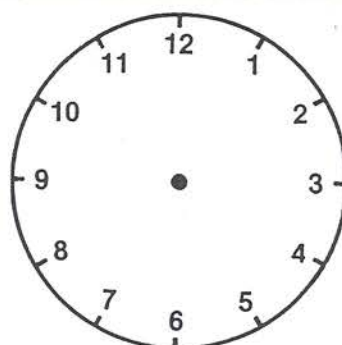


In two hours, the time
will be _____.




Now the time is

8:00.

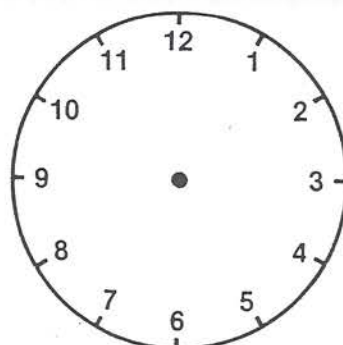


In two hours, the time
will be _____.



Now the time is

11:00.



In two hours, the time
will be _____.