

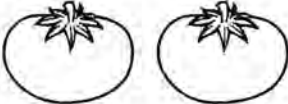

Name: _____



Date: _____

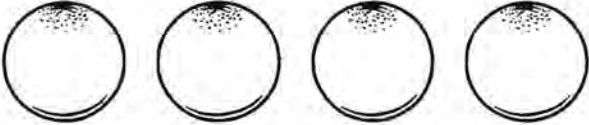

ADDITION



Directions: Add the pictures, and write the answer on the line.



 $+$  $=$ 4

 $+$  $=$ _____

 $+$  $=$ _____

 $+$  $=$ _____

 $+$  $=$ _____

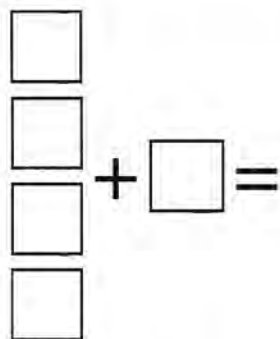
 $+$  $=$ _____

Name: _____

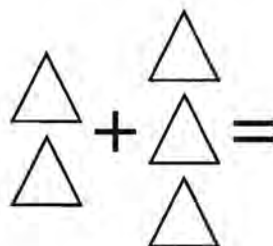
Date: _____

● ADDITION

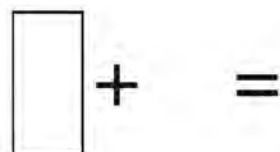
Directions: Add the pictures, and write the answer on the line.



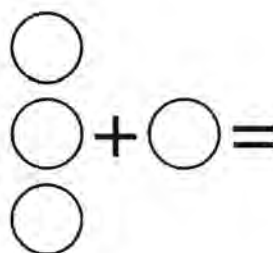
$$4 + 1 = \underline{5}$$



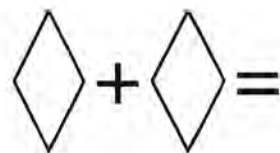
$$2 + 3 = \underline{\quad}$$



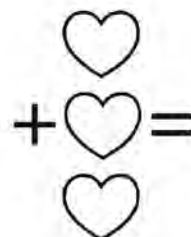
$$1 + 0 = \underline{\quad}$$



$$3 + 1 = \underline{\quad}$$



$$1 + 1 = \underline{\quad}$$




$$0 + 3 = \underline{\quad}$$

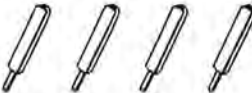
Name: _____


Date: _____


ADDITION


Directions: Add the numbers, and write the answer.

$$\begin{array}{r} 2 \\ + 1 \\ \hline 3 \end{array}$$



$$\begin{array}{r} 4 \\ + 0 \\ \hline \end{array}$$



$$\begin{array}{r} 3 \\ + 2 \\ \hline \end{array}$$


$$\begin{array}{r} 1 \\ + 1 \\ \hline \end{array}$$


$$\begin{array}{r} 1 \\ + 3 \\ \hline \end{array}$$


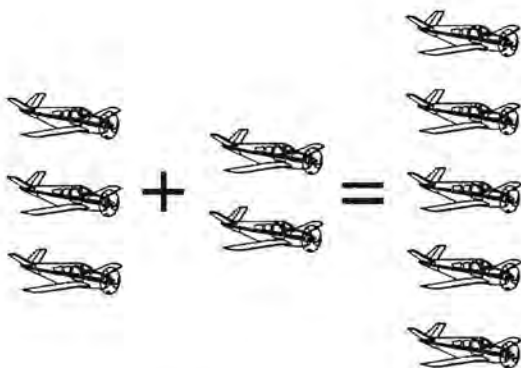
$$\begin{array}{r} 0 \\ + 5 \\ \hline \end{array}$$


$$\begin{array}{r} 2 \\ + 2 \\ \hline \end{array}$$


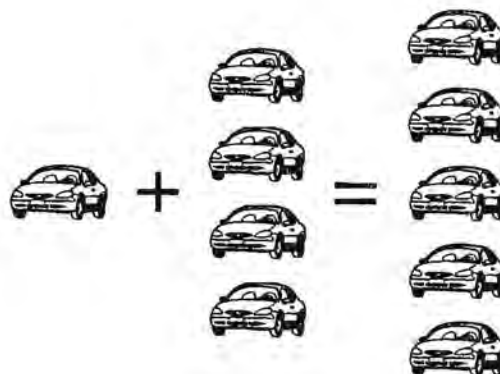
$$\begin{array}{r} 4 \\ + 1 \\ \hline \end{array}$$


ADDITION

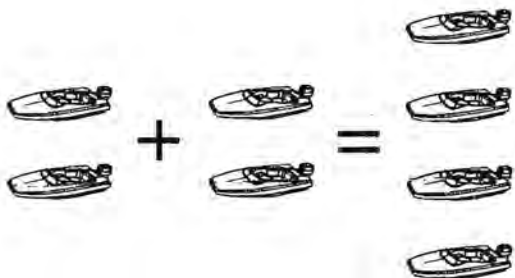
Directions: Circle the number sentence that matches the pictures.



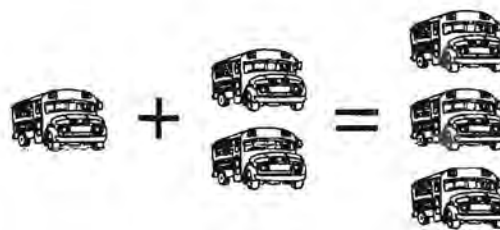
- a. $3 + 2 = 5$
- b. $3 + 1 = 4$



- a. $1 + 3 = 4$
- b. $1 + 4 = 5$



- a. $3 + 3 = 6$
- b. $2 + 2 = 4$



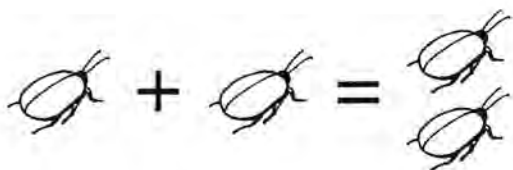
- a. $1 + 2 = 3$
- b. $2 + 2 = 4$

Name: _____

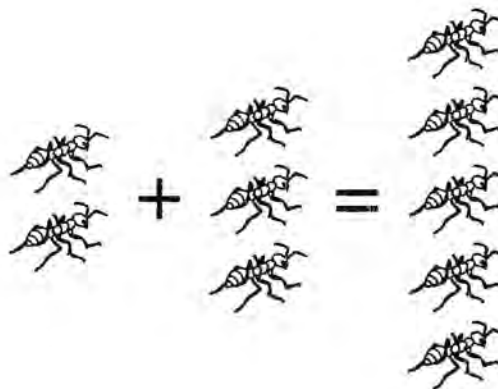
Date: _____

● ADDITION


Directions: Write the number sentence that matches the pictures.



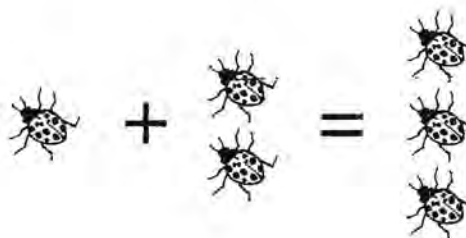
$$\underline{\quad} + \underline{\quad} = \underline{\quad}$$



$$\underline{\quad} + \underline{\quad} = \underline{\quad}$$



$$\underline{\quad} + \underline{\quad} = \underline{\quad}$$



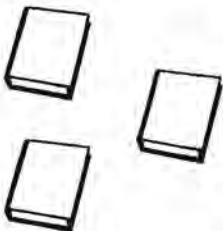
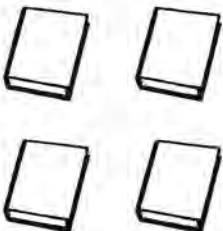
$$\underline{\quad} + \underline{\quad} = \underline{\quad}$$

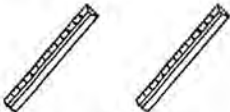
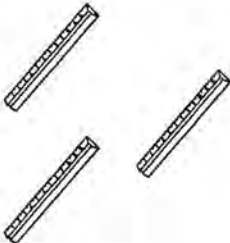
Name: _____



Date: _____


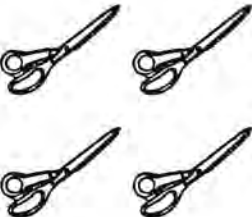
ADDITION

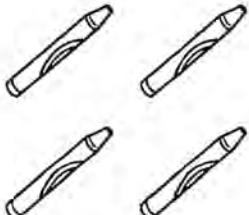
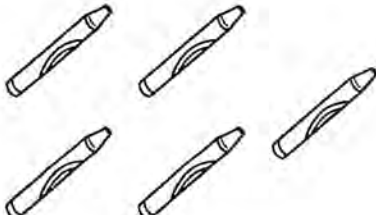
Directions: Add the pictures, and write the answer on the line.

 +  = 7

 +  = _____

 +  = _____

 +  = _____

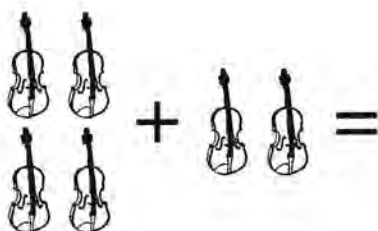
 +  = _____

Name: _____

Date: _____

● ADDITION

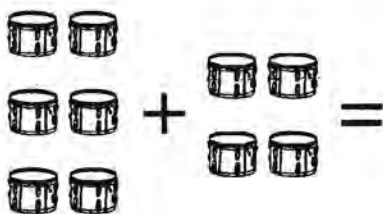
Directions: Add the pictures, and write the answer on the line.



$$4 + 2 = \underline{6}$$



$$5 + 3 = \underline{\quad}$$



$$6 + 4 = \underline{\quad}$$



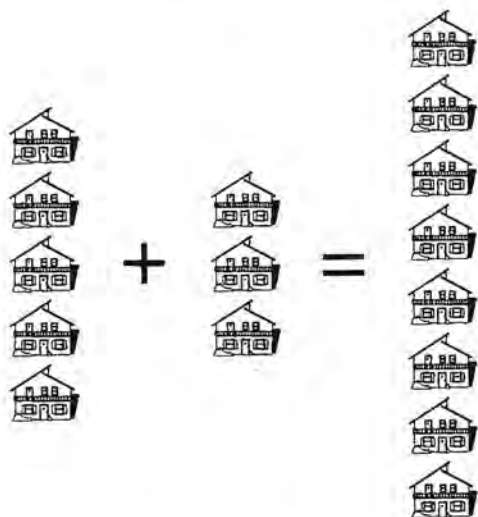
$$3 + 3 = \underline{\quad}$$

Name: _____

Date: _____

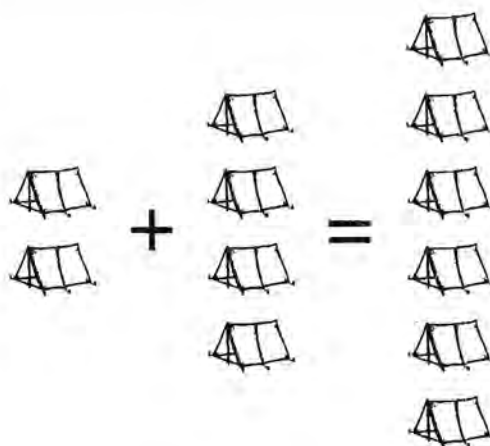
ADDITION

Directions: Circle the number sentence that matches the pictures.



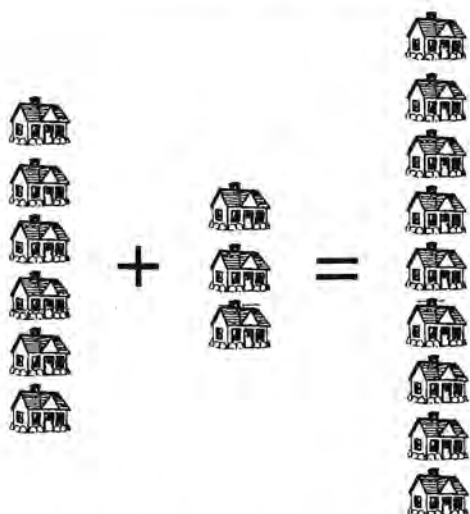
a. $5 + 2 = 7$

b. $5 + 3 = 8$



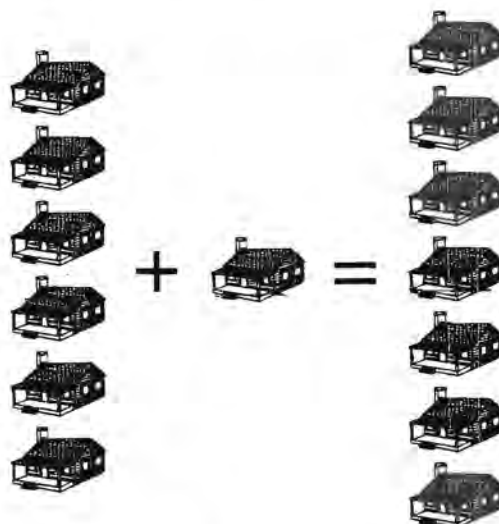
a. $2 + 4 = 6$

b. $2 + 6 = 8$



a. $6 + 3 = 9$

b. $3 + 6 = 9$



a. $5 + 1 = 6$

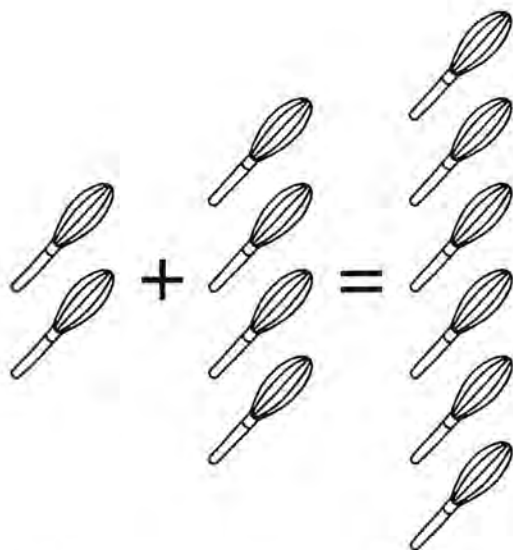
b. $6 + 1 = 7$

Name: _____

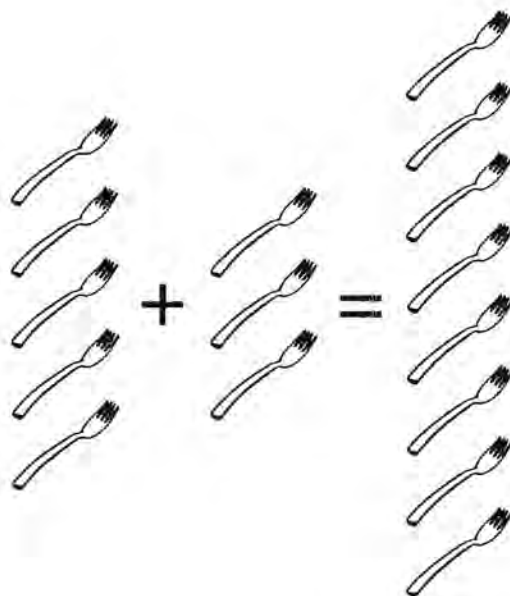
Date: _____

ADDITION

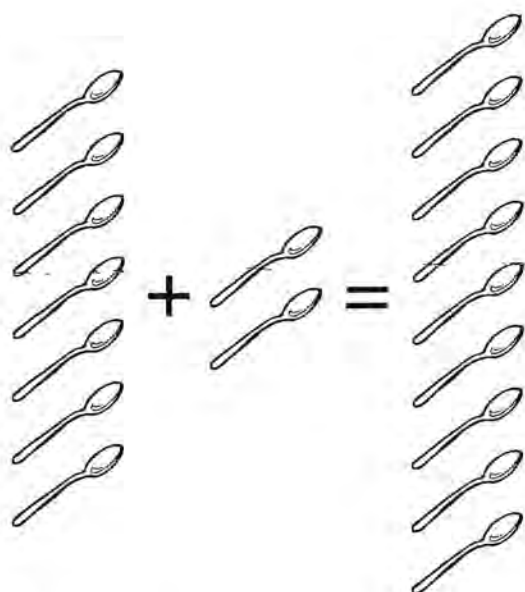
Directions: Write the number sentence that matches the pictures.



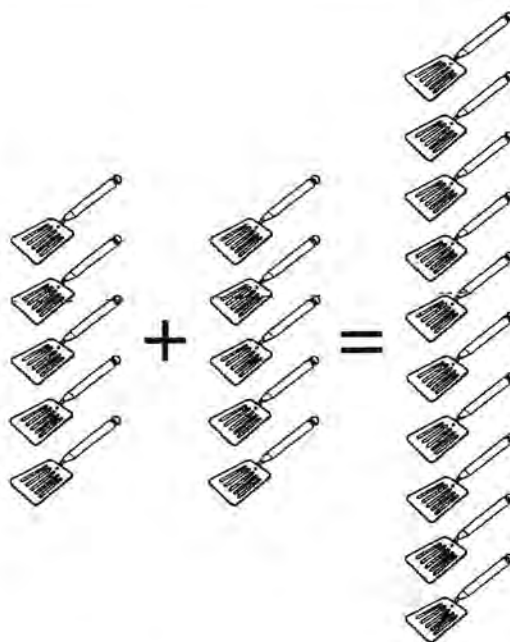
$$2 + 4 = 6$$



$$\underline{\quad} + \underline{\quad} = \underline{\quad}$$



$$\underline{\quad} + \underline{\quad} = \underline{\quad}$$



$$\underline{\quad} + \underline{\quad} = \underline{\quad}$$

Name: _____


Date: _____

● ADDITION


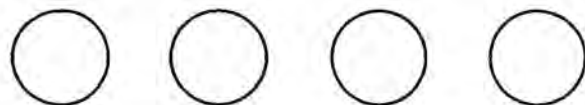
Directions: Draw one more picture, and fill in the missing numbers in the number sentence.




$$\underline{3} + 1 = \underline{4}$$



$$\underline{\quad} + 1 = \underline{\quad}$$



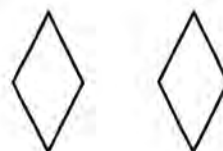
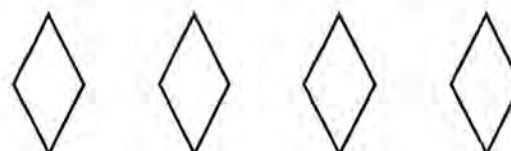
$$\underline{\quad} + 1 = \underline{\quad}$$



$$\underline{\quad} + 1 = \underline{\quad}$$



$$\underline{\quad} + 1 = \underline{\quad}$$



$$\underline{\quad} + 1 = \underline{\quad}$$