















Name: _____

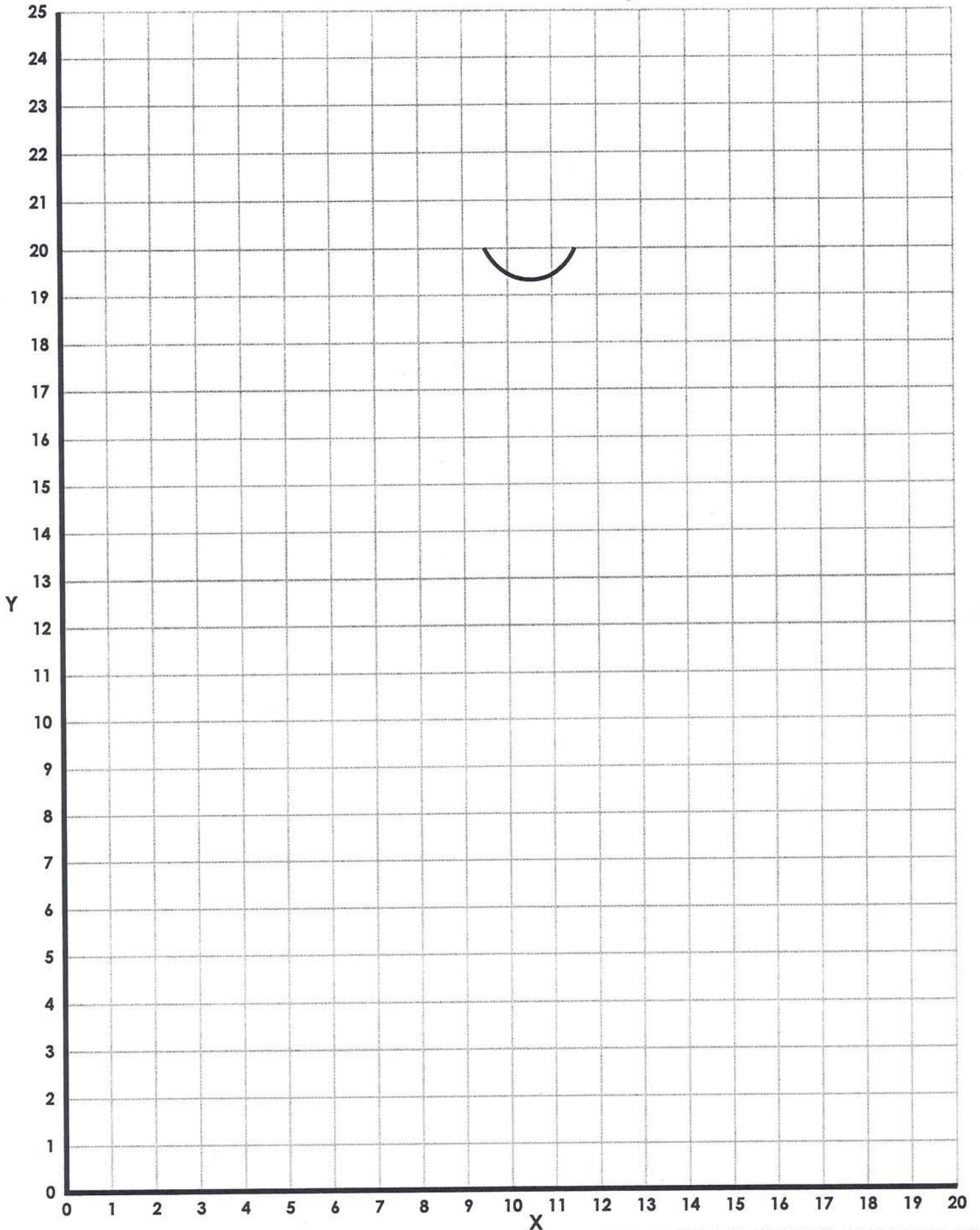
Winter Guy

NOTE: In each section, do NOT connect the last point back to first point.

<u>(X, Y)</u>	<u>(X, Y)</u>	<u>(X, Y)</u>	<u>(X, Y)</u>
<input type="checkbox"/> (7, 22)	<input type="checkbox"/> (9, 12)	<input type="checkbox"/> (8, 22)	<input type="checkbox"/> (10, 22)
<input type="checkbox"/> (14, 22)	<input type="checkbox"/> (12, 12)	<input type="checkbox"/> (8, 25)	<input type="checkbox"/> (10, 21)
	<input type="checkbox"/> (14, 13)	<input type="checkbox"/> (13, 25)	<input type="checkbox"/> (9, 21)
<input type="checkbox"/> (13, 23)	<input type="checkbox"/> (15, 15)	<input type="checkbox"/> (13, 20)	<input type="checkbox"/> (9, 22)
<input type="checkbox"/> (8, 23)	<input type="checkbox"/> (15, 16)	<input type="checkbox"/> (12, 19)	
	<input type="checkbox"/> (14, 18)		<input type="checkbox"/> (9, 12)
<input type="checkbox"/> (9, 12)	<input type="checkbox"/> (12, 19)	<input type="checkbox"/> (11, 17)	<input type="checkbox"/> (7, 13)
<input type="checkbox"/> (7, 11)	<input type="checkbox"/> (9, 19)	<input type="checkbox"/> (11, 18)	<input type="checkbox"/> (6, 15)
<input type="checkbox"/> (5, 9)	<input type="checkbox"/> (8, 20)	<input type="checkbox"/> (10, 18)	<input type="checkbox"/> (6, 16)
<input type="checkbox"/> (4, 7)	<input type="checkbox"/> (8, 22)	<input type="checkbox"/> (10, 17)	<input type="checkbox"/> (7, 18)
<input type="checkbox"/> (4, 5)		<input type="checkbox"/> (11, 17)	<input type="checkbox"/> (9, 19)
<input type="checkbox"/> (5, 3)	<input type="checkbox"/> (0, 3)		
<input type="checkbox"/> (7, 1)	<input type="checkbox"/> (2, 3)	<input type="checkbox"/> (12, 12)	<div style="border: 1px solid black; padding: 5px; text-align: center;">Now color your picture</div>
<input type="checkbox"/> (9, 0)	<input type="checkbox"/> (3, 2)	<input type="checkbox"/> (14, 11)	
	<input type="checkbox"/> (4, 2)	<input type="checkbox"/> (16, 9)	
<input type="checkbox"/> (20, 3)	<input type="checkbox"/> (5, 3)	<input type="checkbox"/> (17, 7)	
<input type="checkbox"/> (18, 2)		<input type="checkbox"/> (17, 5)	
<input type="checkbox"/> (15, 2)	<input type="checkbox"/> (10, 14)	<input type="checkbox"/> (16, 3)	
	<input type="checkbox"/> (10, 13)	<input type="checkbox"/> (14, 1)	
<input type="checkbox"/> (10, 15)	<input type="checkbox"/> (11, 13)	<input type="checkbox"/> (12, 0)	
<input type="checkbox"/> (10, 16)	<input type="checkbox"/> (11, 14)		
<input type="checkbox"/> (11, 16)	<input type="checkbox"/> (10, 14)	<input type="checkbox"/> (12, 12)	
<input type="checkbox"/> (11, 15)		<input type="checkbox"/> (14, 11)	
<input type="checkbox"/> (10, 15)	<input type="checkbox"/> (11, 22)	<input type="checkbox"/> (16, 9)	
	<input type="checkbox"/> (11, 21)	<input type="checkbox"/> (17, 7)	
	<input type="checkbox"/> (12, 21)	<input type="checkbox"/> (17, 5)	
	<input type="checkbox"/> (12, 22)	<input type="checkbox"/> (16, 3)	
		<input type="checkbox"/> (14, 1)	
		<input type="checkbox"/> (12, 0)	

Name: _____

Winter Guy



ANSWER KEY
Winter Guy

