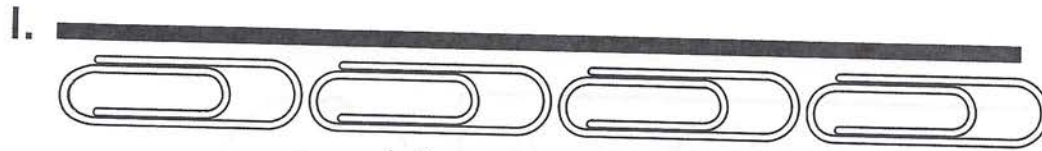


Exploring Length

Estimate the length of each line.
Then use paper clips to measure.



Estimate: about 4 paper clips


Measure: about 4 paper clips



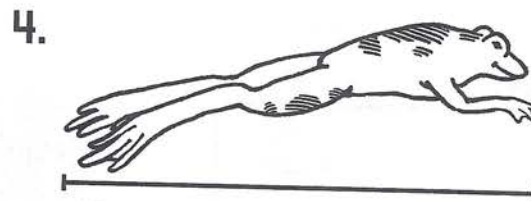
Estimate: about _____ paper clips

Measure: about _____ paper clips

Use paper clips to measure. About how long is each animal's picture?



- (A) 1 paper clip long
- (B) 2 paper clips long
- (C) 3 paper clips long
- (D) 4 paper clips long



- (A) 4 paper clips long
- (B) 3 paper clips long
- (C) 2 paper clips long
- (D) 1 paper clip long

5. **Spatial Thinking** Circle the longest worm.

