

					
					
<u>10</u>	<u>20</u>	<u>25</u>	<u>26</u>	<u>27</u>	<u>28</u>
					

28¢

Count the money. Write the amount.

1.    

10 _____ ¢






2.     

10 _____ ¢

3.      

 ¢

4.     

 ¢