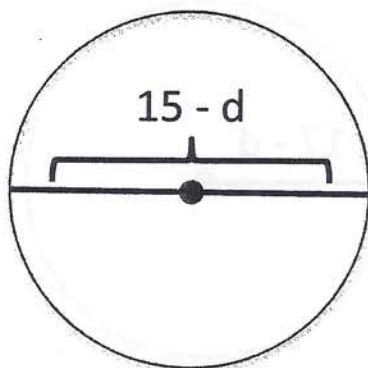


Name: _____

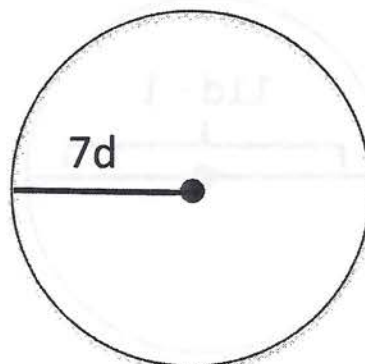
$$d = 3$$

Radius and Diameter Homework



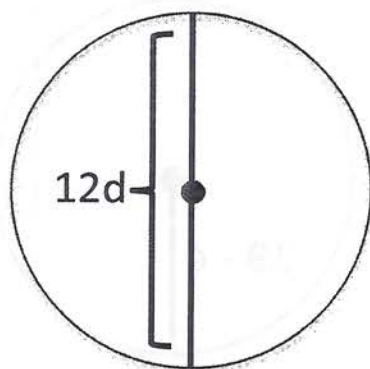
Radius: _____

Diameter: _____



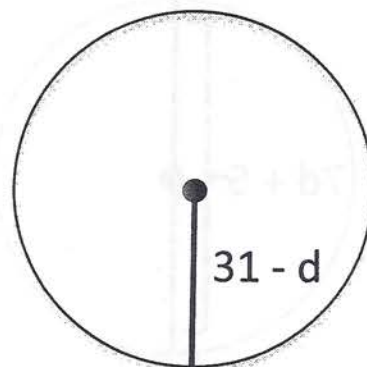
Radius: _____

Diameter: _____



Radius: _____

Diameter: _____



Radius: _____

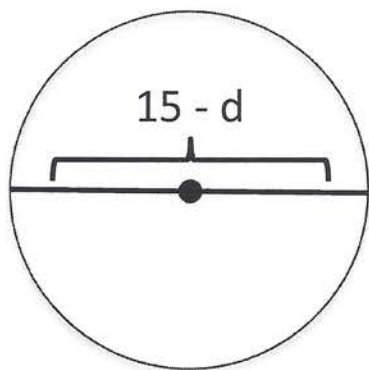
Diameter: _____

Name: _____

ANSWERS

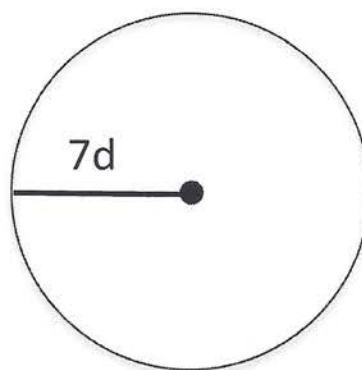
$d = 3$

Radius and Diameter Homework



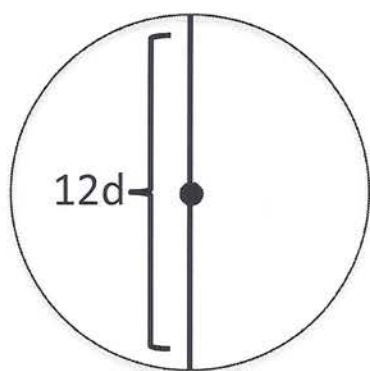
Radius: _____ 6 _____

Diameter: _____ 12 _____



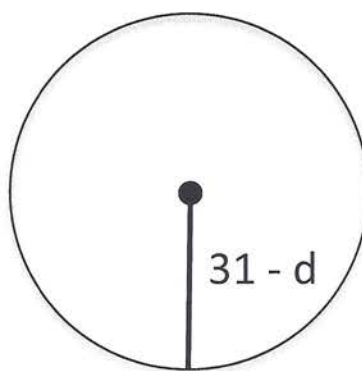
Radius: _____ 21 _____

Diameter: _____ 42 _____



Radius: _____ 18 _____

Diameter: _____ 36 _____



Radius: _____ 28 _____

Diameter: _____ 56 _____