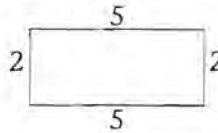


Minute 96

Name _____

1. Write the number two hundred thirty-one. _____















2. Write the perimeter. _____




3. $89 + 10 =$ _____

Use the pictograph to complete questions 4–6.

Children's Favorite Sport

| | |
|---|---|
| Skating  |     |
| Basketball  |   |
| Soccer  |      |

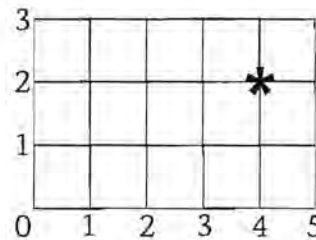
 = 5 children

4. How many children like soccer? _____ children

5. Is skating liked more than soccer? _____

6. How many more children like soccer than basketball?
_____ more children

7. Where is the star on the graph?
_____ across _____ up



8.
$$\begin{array}{r} 454 \\ - 58 \\ \hline \end{array}$$

9. A paper cup holds more than 1 gallon. Circle: True or False

10. Use $<$, $>$, or $=$.



_____ \$5.00