

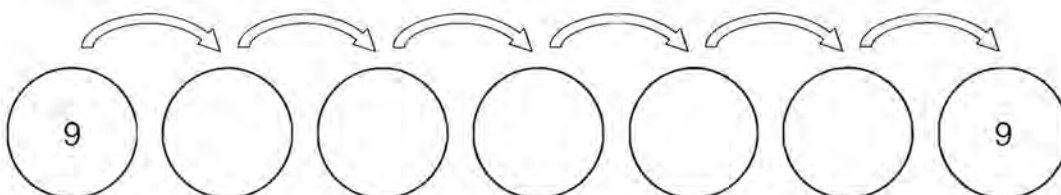
**LESSON**  
**7•3**
**Frames-and-Arrows Puzzles**


Each puzzle has two rules. For each puzzle, color the arrow for one rule red and color the arrow for the other rule blue. For Problems 1 through 3, figure out where to place the rules to solve the problems. You may use your calculator.

**1.**

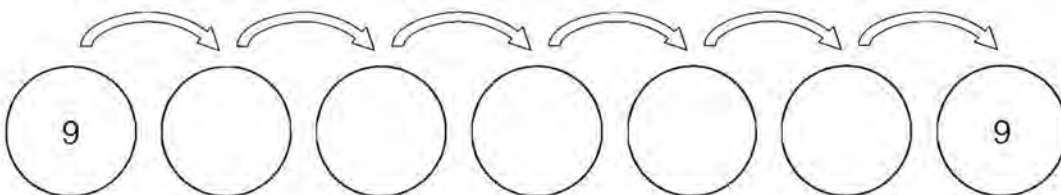
$\boxed{\times 9}$

$\boxed{\div 3}$


**2.** Find another way.

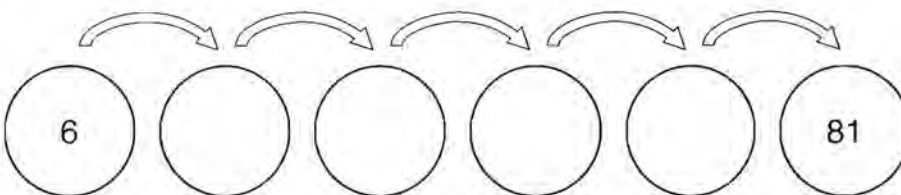
$\boxed{\times 9}$

$\boxed{\div 3}$


**3.**

$\boxed{\times 6}$

$\boxed{\div 4}$


**4.** Make up a puzzle. Ask a partner to solve it.

$\boxed{\phantom{\times}}$

$\boxed{\phantom{\div}}$

