

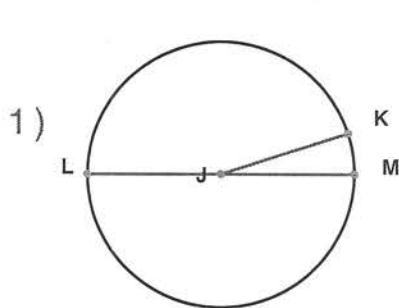
Name : \_\_\_\_\_

Score : \_\_\_\_\_

Teacher : \_\_\_\_\_

Date : \_\_\_\_\_

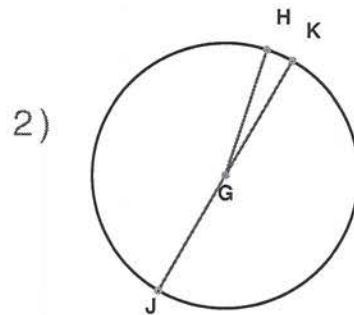
Identify the elements for each problem.



Circle: \_\_\_\_\_

Radius: \_\_\_\_\_

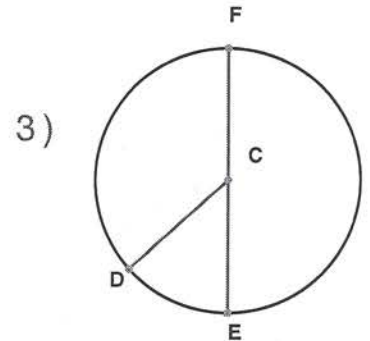
Diameter: \_\_\_\_\_



Circle: \_\_\_\_\_

Radius: \_\_\_\_\_

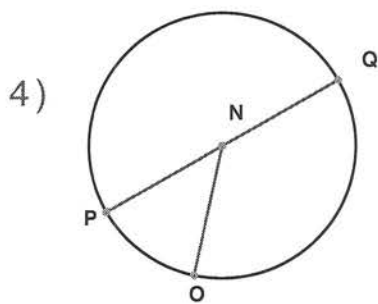
Diameter: \_\_\_\_\_



Circle: \_\_\_\_\_

Radius: \_\_\_\_\_

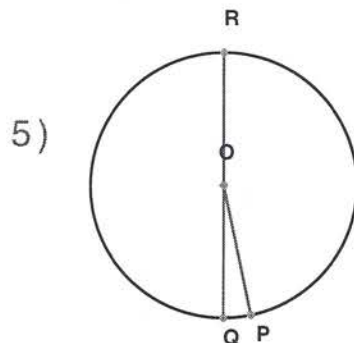
Diameter: \_\_\_\_\_



Circle: \_\_\_\_\_

Radius: \_\_\_\_\_

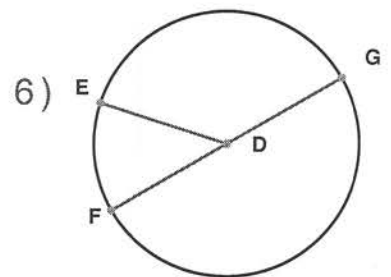
Diameter: \_\_\_\_\_



Circle: \_\_\_\_\_

Radius: \_\_\_\_\_

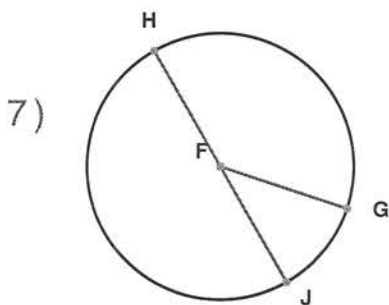
Diameter: \_\_\_\_\_



Circle: \_\_\_\_\_

Radius: \_\_\_\_\_

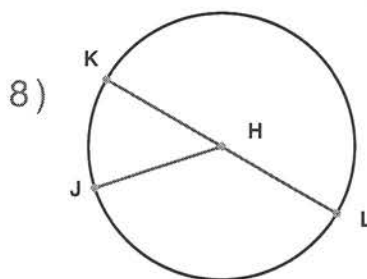
Diameter: \_\_\_\_\_



Circle: \_\_\_\_\_

Radius: \_\_\_\_\_

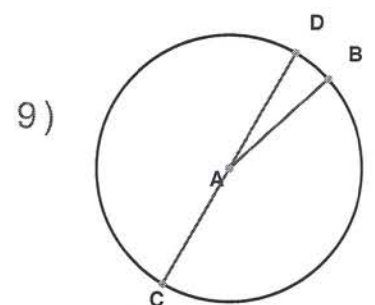
Diameter: \_\_\_\_\_



Circle: \_\_\_\_\_

Radius: \_\_\_\_\_

Diameter: \_\_\_\_\_



Circle: \_\_\_\_\_

Radius: \_\_\_\_\_

Diameter: \_\_\_\_\_

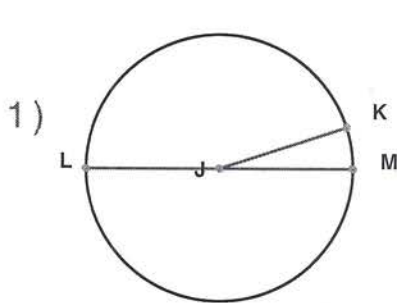
Name : \_\_\_\_\_

Score : \_\_\_\_\_

Teacher : \_\_\_\_\_

Date : \_\_\_\_\_

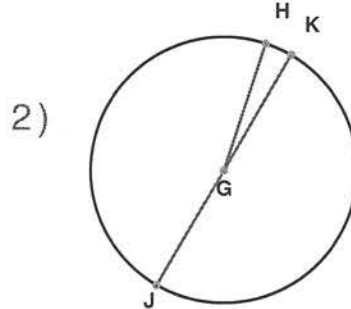
Identify the elements for each problem.



Circle:   J  

Radius:   JK  JL  JM  

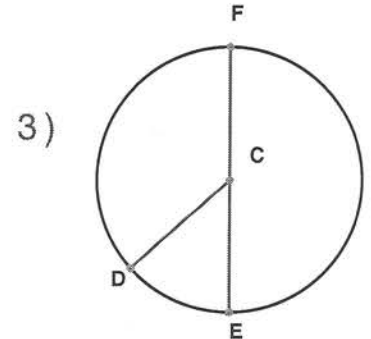
Diameter:   LM  



Circle:   G  

Radius:   GH  GJ  GK  

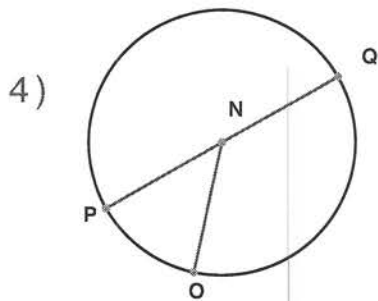
Diameter:   JK  



Circle:   C  

Radius:   CD  CE  CF  

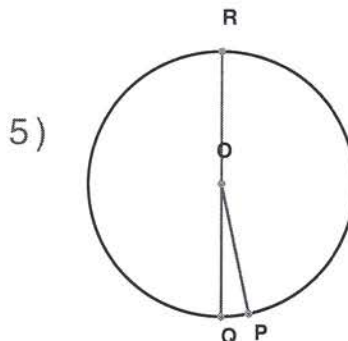
Diameter:   EF  



Circle:   N  

Radius:   NO  NP  NQ  

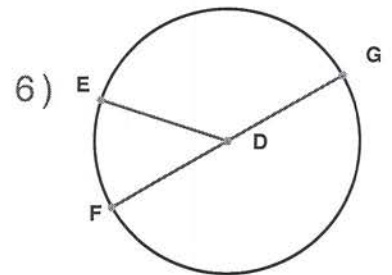
Diameter:   PQ  



Circle:   O  

Radius:   OP  OQ  OR  

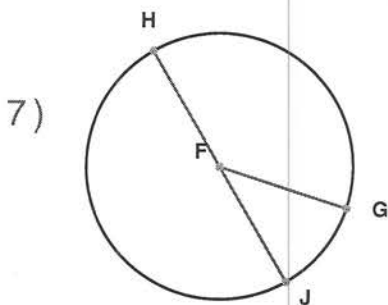
Diameter:   QR  



Circle:   D  

Radius:   DE  DF  DG  

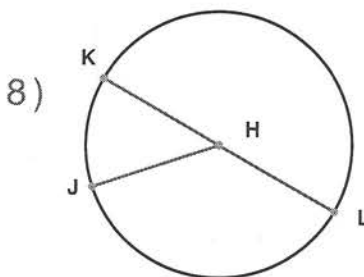
Diameter:   FG  



Circle:   F  

Radius:   FG  FH  FJ  

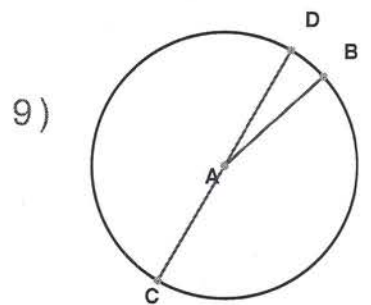
Diameter:   HJ  



Circle:   H  

Radius:   HJ  HK  HL  

Diameter:   KL  



Circle:   A  

Radius:   AB  AC  AD  

Diameter:   CD