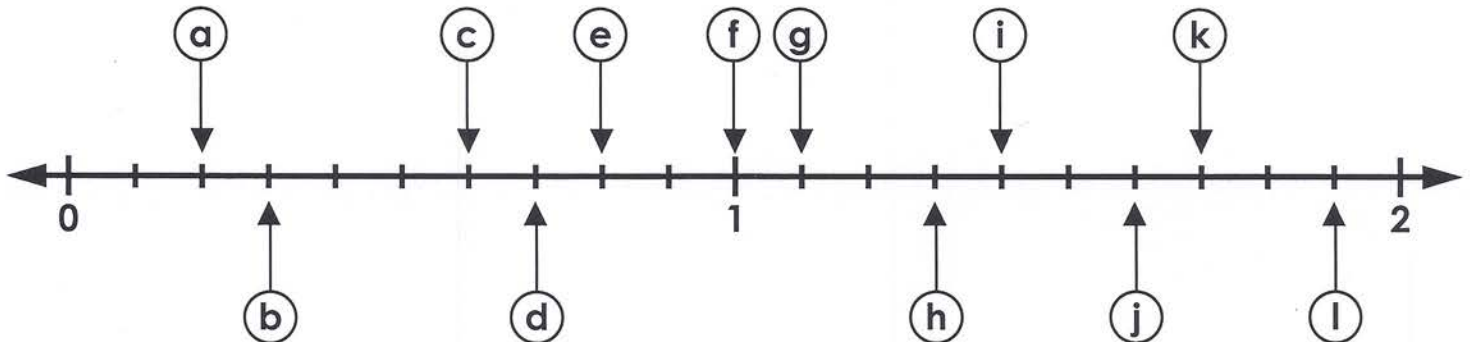


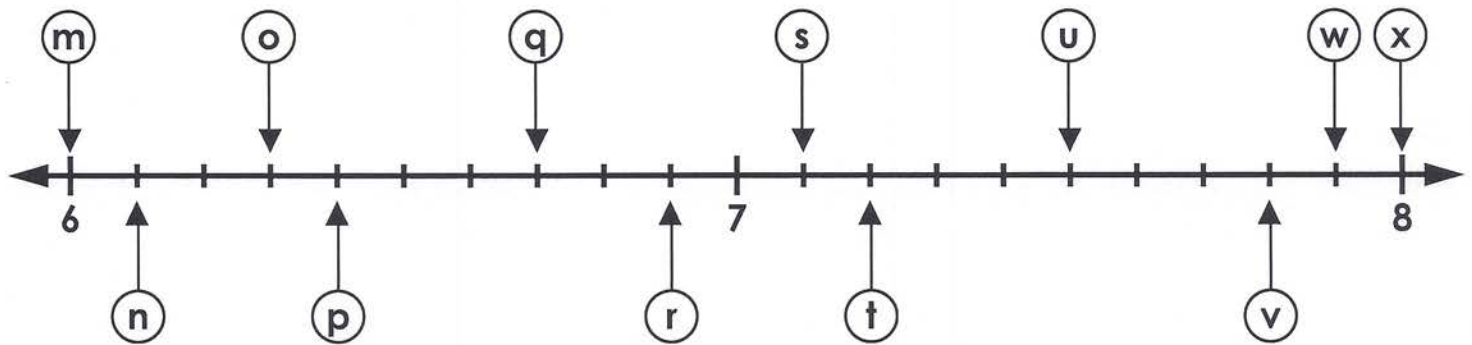
Name: _____

Decimal Number Line

Write the correct decimal on the blank line next to each letter.



- a. 0.2 b. _____ c. _____ d. _____
- e. _____ f. _____ g. _____ h. _____
- i. _____ j. _____ k. _____ l. _____

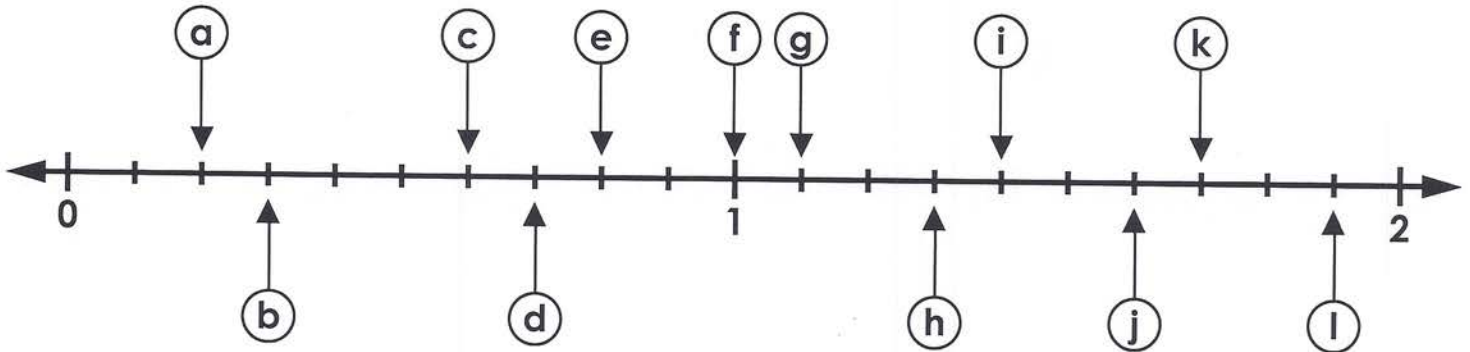


- m. _____ n. _____ o. _____ p. _____
- q. _____ r. _____ s. _____ t. _____
- u. _____ v. _____ w. _____ x. _____

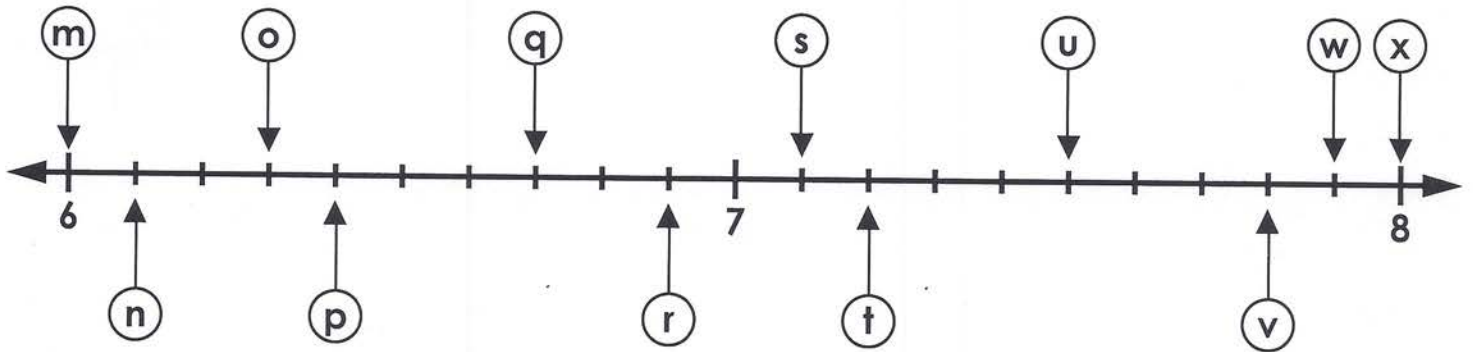
ANSWER KEY

Decimal Number Line

Write the correct decimal on the blank line next to each letter.



- a. 0.2 b. 0.3 c. 0.6 d. 0.7
- e. 0.8 f. 1.0 g. 1.1 h. 1.3
- i. 1.4 j. 1.6 k. 1.7 l. 1.9



- m. 6.0 n. 6.1 o. 6.3 p. 6.4
- q. 6.7 r. 6.9 s. 7.1 t. 7.2
- u. 7.5 v. 7.8 w. 7.9 x. 8.0