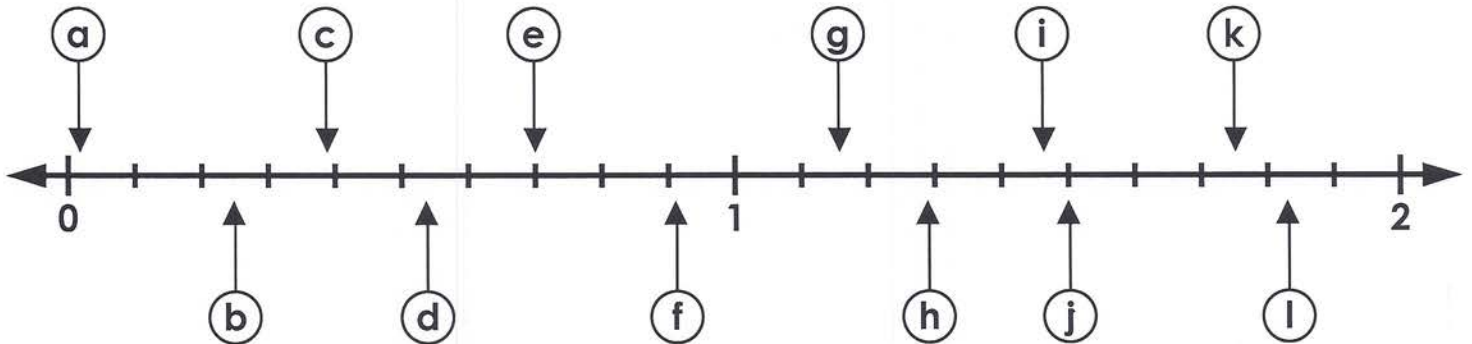


Name: _____

Decimal Number Line

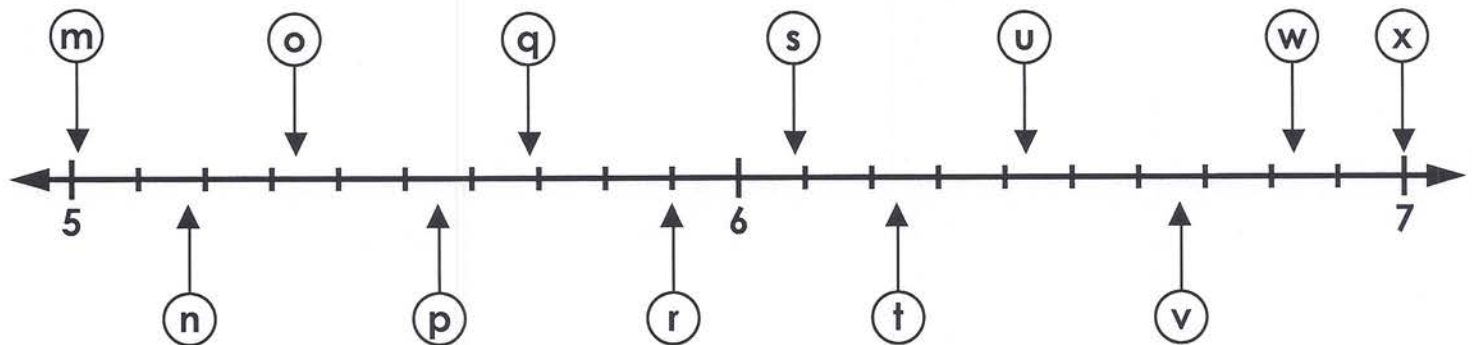
Write the correct letter on the blank line next to each decimal.



0.38 c 1.16 _____ 1.75 _____ 0.54 _____

0.70 _____ 1.47 _____ 0.02 _____ 1.50 _____

1.29 _____ 0.25 _____ 1.83 _____ 0.91 _____



5.90 _____ 5.34 _____ 6.43 _____ 5.55 _____

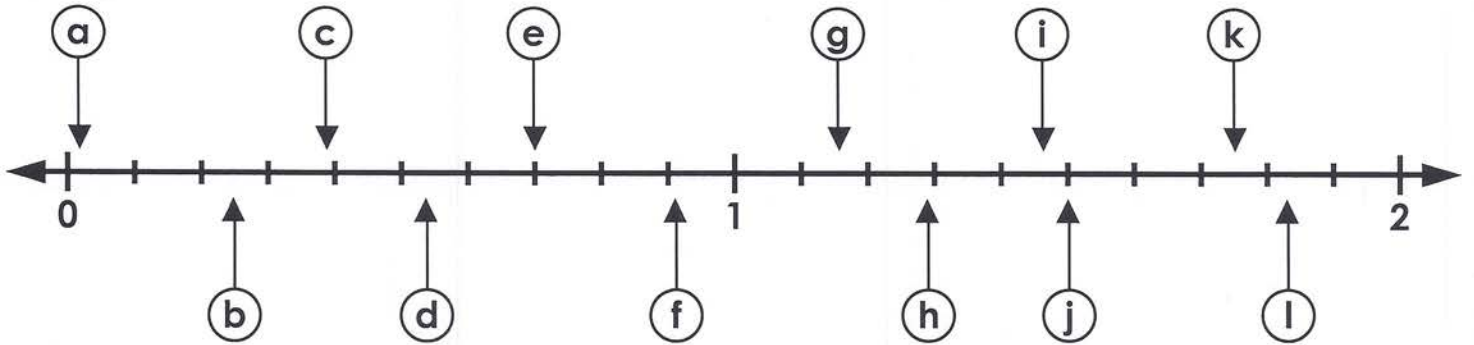
6.67 _____ 6.08 _____ 5.01 _____ 7.00 _____

5.17 _____ 6.83 _____ 5.69 _____ 6.24 _____

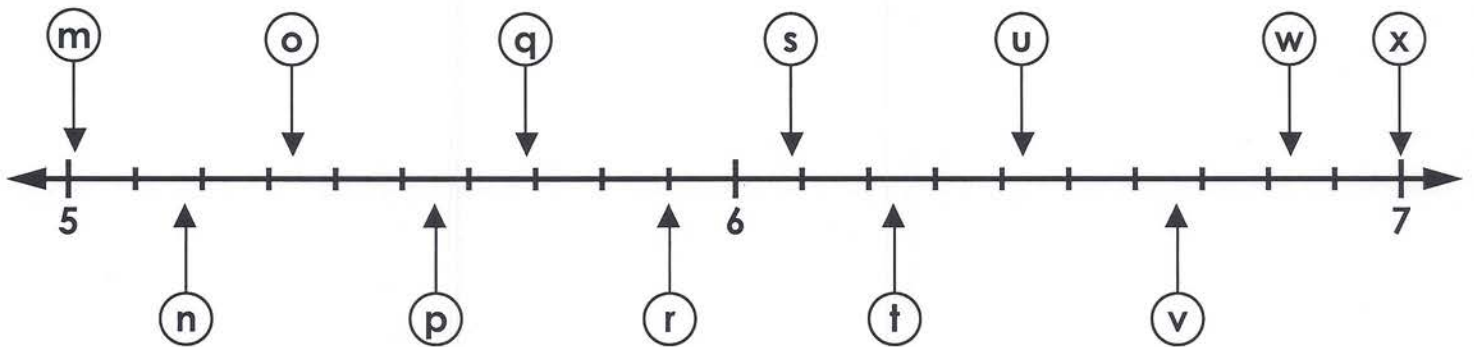
ANSWER KEY

Decimal Number Line

Write the correct letter on the blank line next to each decimal.



0.38	<u> c </u>	1.16	<u> g </u>	1.75	<u> k </u>	0.54	<u> d </u>
0.70	<u> e </u>	1.47	<u> i </u>	0.02	<u> a </u>	1.50	<u> j </u>
1.29	<u> h </u>	0.25	<u> b </u>	1.83	<u> l </u>	0.91	<u> f </u>



5.90	<u> r </u>	5.34	<u> o </u>	6.43	<u> u </u>	5.55	<u> p </u>
6.67	<u> v </u>	6.08	<u> s </u>	5.01	<u> m </u>	7.00	<u> x </u>
5.17	<u> n </u>	6.83	<u> w </u>	5.69	<u> q </u>	6.24	<u> t </u>